

Name:

Date:

Period:

### Physical Characteristics & Economy Activity

**Directions:** Using the information below in "Table A", complete "Table B" based on the physical characteristics/exports listed.

TABLE A






<p><b>Farmland</b></p> 	<p><b>Location</b></p> 	<p><b>Forest</b></p> 	<p><b>Bodies of Water</b></p> 	<p><b>Rich History &amp; Culture</b></p> 
<p><u>Agriculture</u> -Fruits &amp; Vegetables --Livestock -Animals</p>	<p><u>Military</u></p>	<p><u>Trees</u> <u>Minerals</u> --Cooper --Gold <u>Natural Resources</u> --natural gas</p>	<p><u>Fishing</u> <u>Pearl Farming</u></p>	<p><u>Tourism</u></p>

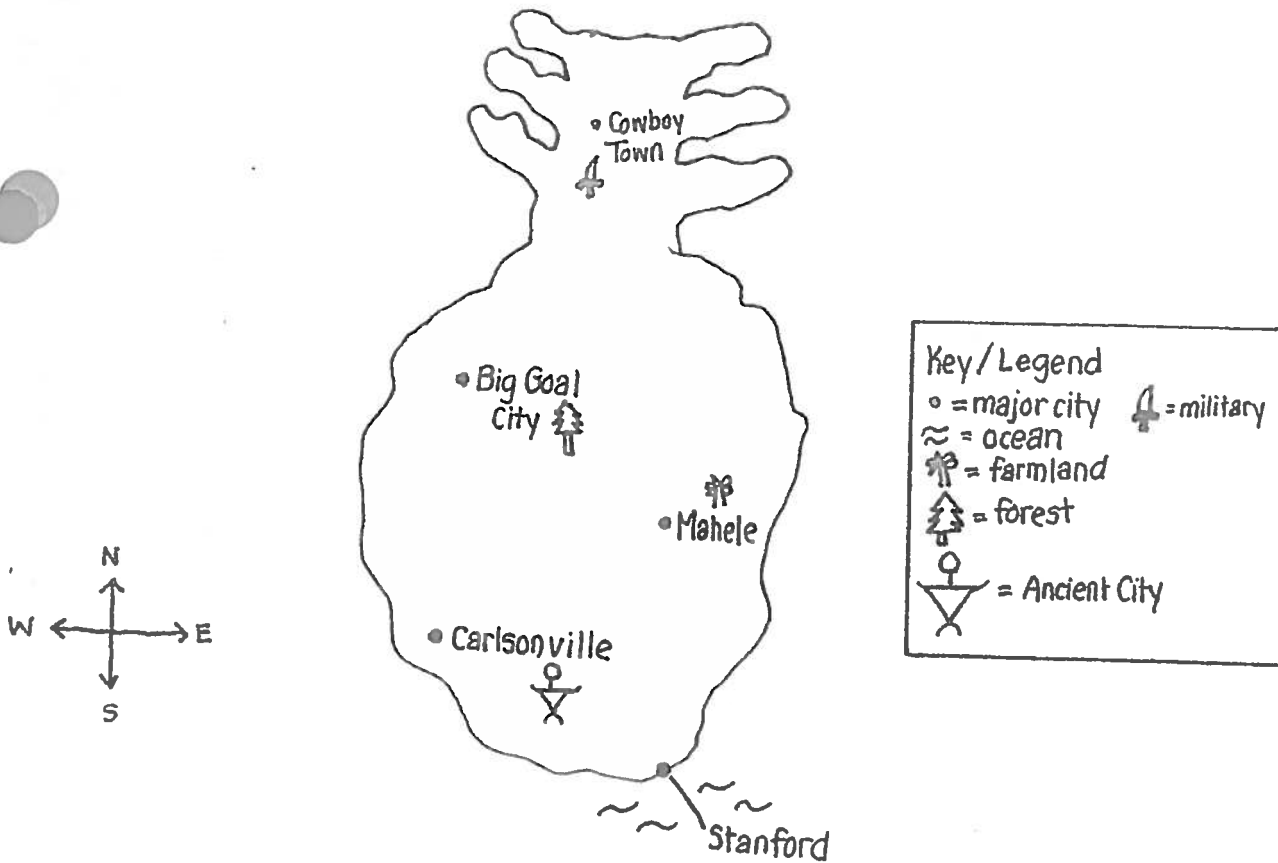
TABLE B

Island	Major Economic Activities	Physical Characteristics
Fiji	<ul style="list-style-type: none"> <li>-Forest (trees)</li> <li>-Minerals</li> <li>-Fishing</li> <li>-Tourism</li> </ul>	
Solomon Islands		<ul style="list-style-type: none"> <li>-Farmland</li> <li>-Bodies of Water</li> <li>-Minerals, including: lead, zinc, nickel, gold</li> </ul>
Guam	<ul style="list-style-type: none"> <li>-Military</li> <li>-Tourism</li> </ul>	
Palau		<ul style="list-style-type: none"> <li>-Bodies of Water</li> <li>-Rich Culture and History</li> </ul>
French Polynesia	<ul style="list-style-type: none"> <li>-Tourism</li> <li>-Pearl Farming</li> <li>-Military Testing</li> <li>-Deep Sea Fishing</li> </ul>	

Samoa		-Farmland -Bodies of Water
Wallis and Futana	-80% agriculture, including coconuts and vegetables -Pigs -Fishing	

**PART II: Welcome to the greatest country in the world....Mr. Carlson Land! It is home to a variety of locations and physical characteristics—in addition to good looking, smart, Big Goal and athletic people. Your job as the newly appointed Governor, is to determine the best exports and resources we can use to build the economy of Mr. Carlson Land. Listed below you will find a map with a location of the 5 major cities of Mr. Carlson Land. Using the map and legend below, identify the economic activities each city could have to boost the economy.**

## Mr. Carlson Land



**PART II: Questions**

*Please use complete sentences to answer each of the following questions.*



1. What is the major economic activity of "Cowboy Town" and why?

2. What is the major economic activity of "Big Goal City" and why?

3. What is the major economic activity of "Mahele" and why?

4. What is the major economic activity of "Carlsonville" and why?



5. What is the major economic activity of "Stanford" and why?

**Part III: Constructed Response: Explain the role physical characteristics and location can play in determining the economic activities of a given place. Please be sure to use complete sentences and examples discussed in class.**

---

---

---

---

---

---

---

---

---

---

